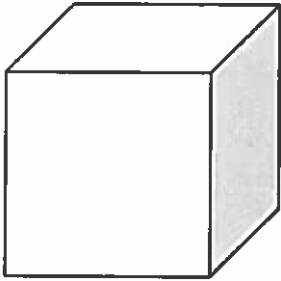
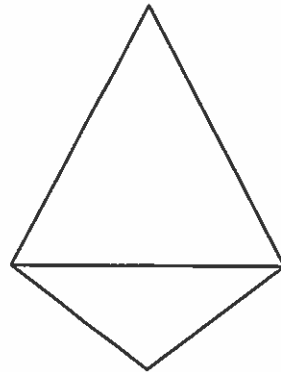
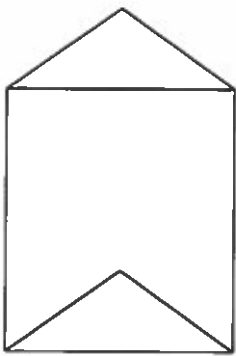
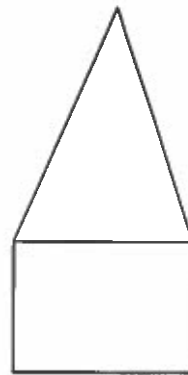


What Can You Tell About
Me?





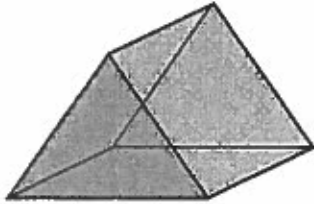




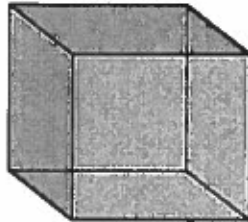
Name : _____

PRISMS & PYRAMIDS


PRISMS



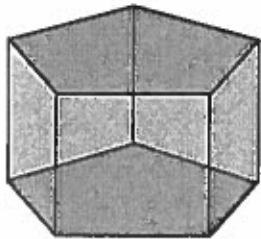
Triangular prism




Square prism




Rectangular prism



Pentagonal prism

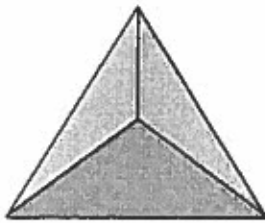


Hexagonal prism

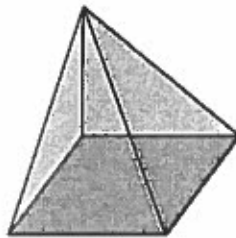


Octagonal prism

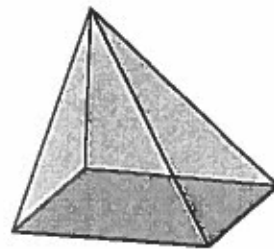
PYRAMIDS



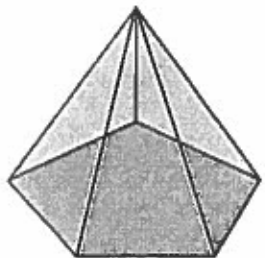
Triangular pyramid



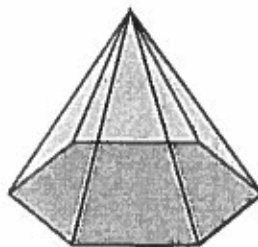
Square pyramid



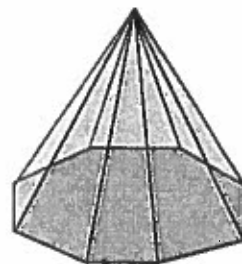
Rectangular pyramid



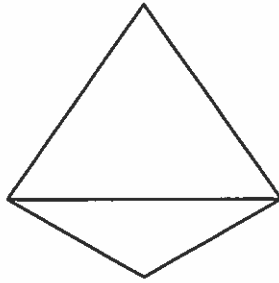
Pentagonal pyramid



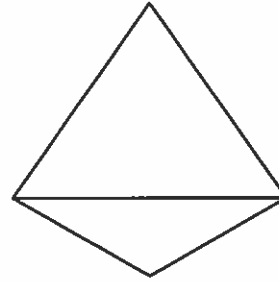
Hexagonal pyramid



Octagonal pyramid



Riddles



Use your knowledge of geometry to identify these figures.

1. I have four sides.

All my sides are the same length.

I have four right angles.

What am I? _____

2. I have six faces.

My faces meet at right angles.

All my faces are squares.

What am I? _____

3. I have five faces.

All but one of my faces is a triangle

The face of the base has two pairs of parallel sides and four right angles.

What am I? _____

4. I have five faces.

My base shape has three sides.

I am constructed with three rectangles.

What am I? _____